

Curs 14

Seminar 2

Filtre – Problema 1

- Proiectați un filtru trece sus cu elemente concentrate cu frecvența de tăiere 1GHz, un echiriplu de 3 dB, cu atenuare mai mare de 40dB la 0.6GHz care să lucreze pe impedanțe rezistive de 50Ω .

$$n \geq \frac{\operatorname{ch}^{-1} \left(\sqrt{\left\{ \left[\left(10^{0,1L_{As}} \right) - 1 \right] / \left[\left(10^{0,1L_{Ar}} \right) - 1 \right] \right\}} \right)}{\operatorname{ch}^{-1}(\omega'_s / \omega'_1)}$$

Filtre prototip de tip echi-riplu cu terminații rezistive

0.5 dB Ripple

N	g_1	g_2	g_3	g_4	g_5	g_6	g_7	g_8	g_9	g_{10}	g_{11}
1	0.6986	1.0000									
2	1.4029	0.7071	1.9841								
3	1.5963	1.0967	1.5963	1.0000							
4	1.6703	1.1926	2.3661	0.8419	1.9841						
5	1.7058	1.2296	2.5408	1.2296	1.7058	1.0000					
6	1.7254	1.2479	2.6064	1.3137	2.4758	0.8696	1.9841				
7	1.7372	1.2583	2.6381	1.3444	2.6381	1.2583	1.7372	1.000			
8	1.7451	1.2647	2.6564	1.3590	2.6964	1.3389	2.5093	0.8796	1.9841		
9	1.7504	1.2690	2.6678	1.3673	2.7239	1.3673	2.6678	1.2690	1.7504	1.0000	
10	1.7543	1.2721	2.6754	1.3725	2.7392	1.3806	2.7231	1.3485	2.5239	0.8842	1.9841

Filtre prototip de tip echi-riplu cu terminații rezistive

$$g_1 = \frac{2a_1}{\gamma}$$

$$g_k = \frac{4a_{k-1}a_k}{b_{k-1}g_{k-1}}, k = 2, 3, \dots, n$$

$$g_{n+1} = \begin{cases} 1 & \text{pentru } n = \text{impar} \\ \coth^2\left(\frac{\beta}{4}\right) & \text{pentru } n = \text{par} \end{cases}$$

$$a_k = \sin\left[\frac{(2k-1)\pi}{2n}\right], k = 1, 2, \dots, n$$

$$b_k = \gamma^2 + \sin^2\left(\frac{k\pi}{n}\right), k = 1, 2, \dots, n$$

$$\beta = \ln\left(\coth\frac{L_{Ar}}{17,37}\right)$$

$$\gamma = \sinh\left(\frac{\beta}{2n}\right)$$

Scalarea in impedanta si frecventa, FTS

Scalarea in impedanta

$$L' = R_0 L$$

$$C' = \frac{C}{R_0}$$

$$R'_s = R_0$$

$$R'_L = R_0 R_L$$

Scalarea in frecventa

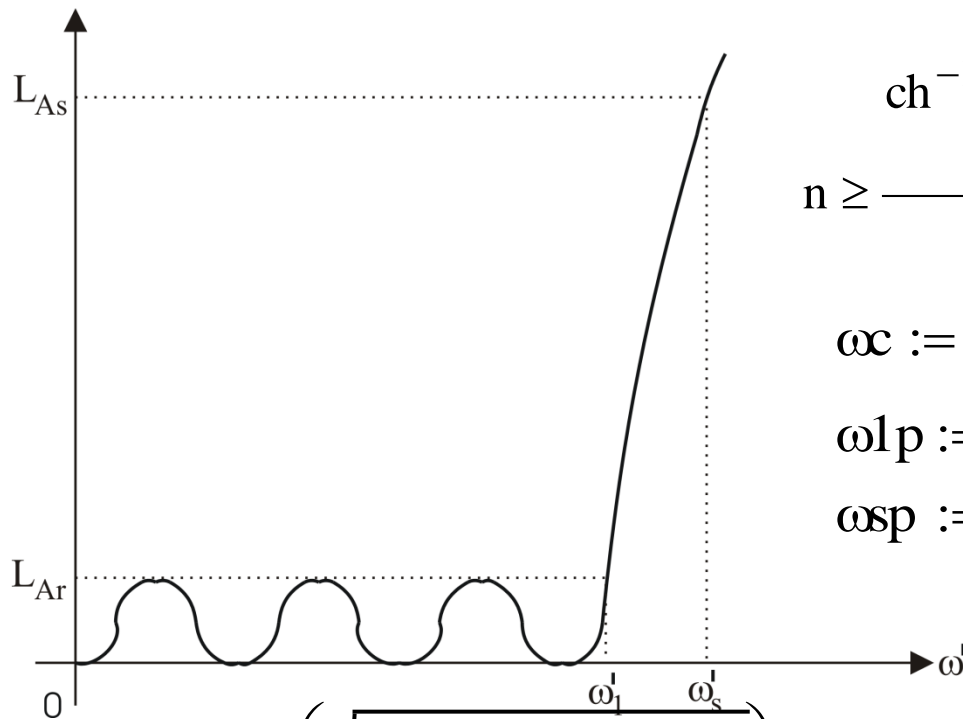
$$\omega \leftarrow -\frac{\omega_c}{\omega}$$

Valorile noi

$$C'_k = \frac{1}{R_0 \omega_c L_k}$$

$$L'_k = \frac{R_0}{\omega_c C_k}$$

Calculul ordinului filtrului echi-riplu



$$n \geq \frac{\text{ch}^{-1} \left(\sqrt{ \left\{ \left[\left(10^{0,1L_{As}} \right) - 1 \right] / \left[\left(10^{0,1L_{Ar}} \right) - 1 \right] \right\} } \right)}{\text{ch}^{-1}(\omega'_s / \omega'_1)}$$

$$\omega_c := 2 \cdot \pi \cdot 1 \text{GHz} \quad \omega_p(\omega) := \frac{\omega_c}{\omega}$$

$$\omega_{1p} := \omega_p(\omega_c) \quad \omega_{1p} = 1$$

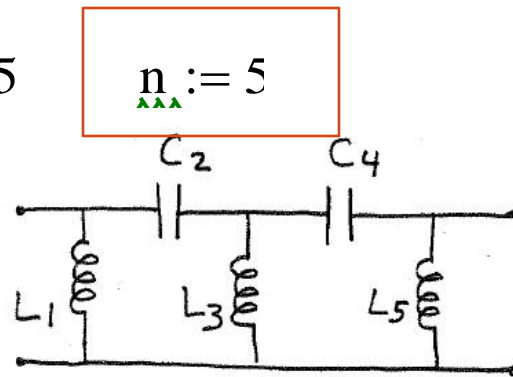
$$\omega_{sp} := \omega_p(2 \cdot \pi \cdot 0.6 \text{GHz}) \quad \omega_{sp} = 1.667$$

$$L_{As_dB} := 4 \quad L_{Ar_dB} := 3$$

$$n := \frac{\text{acosh} \left(\sqrt{ \frac{10^{0,1 \cdot L_{As_dB}} - 1}{10^{0,1 \cdot L_{Ar_dB}} - 1} } \right)}{\text{acosh} \left(\frac{\omega_{sp}}{\omega_{1p}} \right)}$$

$$n = 4.825$$

$$n := 5$$



Rezolvare Mathcad

$$\beta := \ln\left(\coth\left(\frac{LAr_{dB}}{17.37}\right)\right) \quad \beta = 1.766 \quad \gamma := \sinh\left(\frac{\beta}{2 \cdot n}\right) \quad \gamma = 0.178$$

$$a(k) := \sin\left(\frac{2k-1}{2 \cdot n} \cdot \pi\right) \quad b(k) := \gamma^2 + \sin\left(\frac{k \cdot \pi}{n}\right)^2$$

$$g := \begin{cases} g_1 \leftarrow 2 \cdot \frac{a(1)}{\gamma} \\ \text{for } k \in 2..n \\ g_k \leftarrow \frac{4 \cdot a(k-1) \cdot a(k)}{b(k-1) \cdot g_{k-1}} \\ g \end{cases} = \begin{pmatrix} 0 \\ 3.481 \\ 0.762 \\ 4.538 \\ 0.762 \\ 3.481 \end{pmatrix}$$

$$L1 := \frac{R0}{\omega c \cdot g_1} \quad L1 = 2.286 \times 10^{-9} \text{ H}$$

$$C2 := \frac{1}{R0 \omega c \cdot g_2} \quad C2 = 4.178 \times 10^{-12} \text{ F}$$

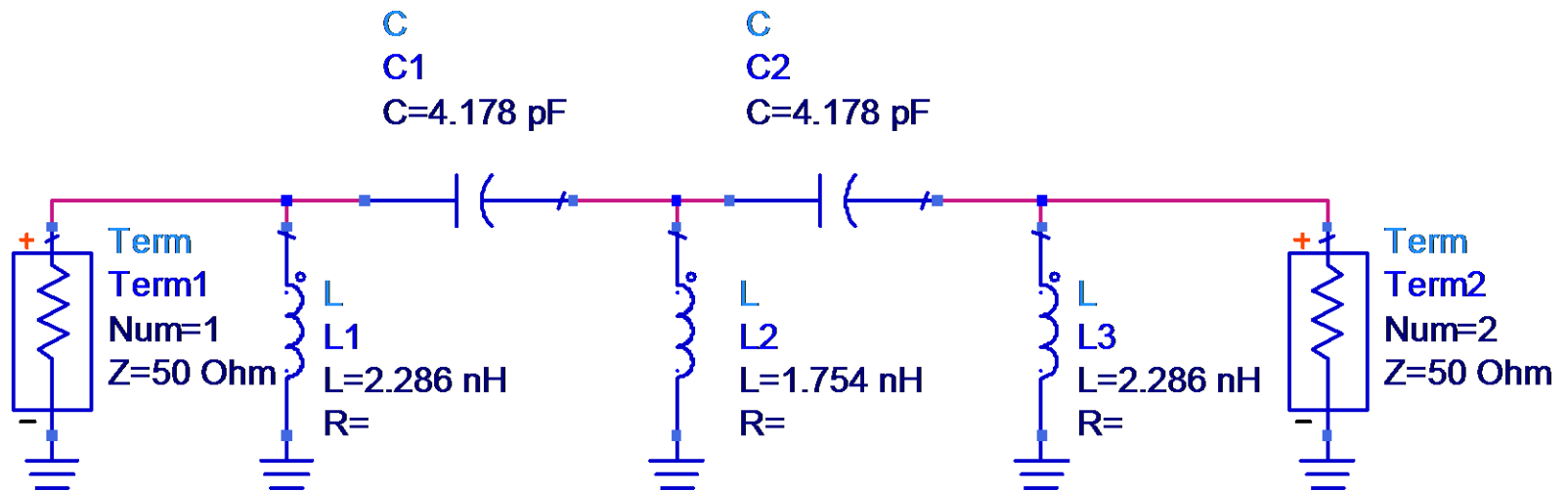
$$L3 := \frac{R0}{\omega c \cdot g_3} \quad L3 = 1.754 \times 10^{-9} \text{ H}$$

$$C4 := \frac{1}{R0 \omega c \cdot g_4} \quad C4 = 4.178 \times 10^{-12} \text{ F}$$

$$L5 := \frac{R0}{\omega c \cdot g_5} \quad L5 = 2.286 \times 10^{-9} \text{ H}$$

$$R0 := 50 \Omega$$

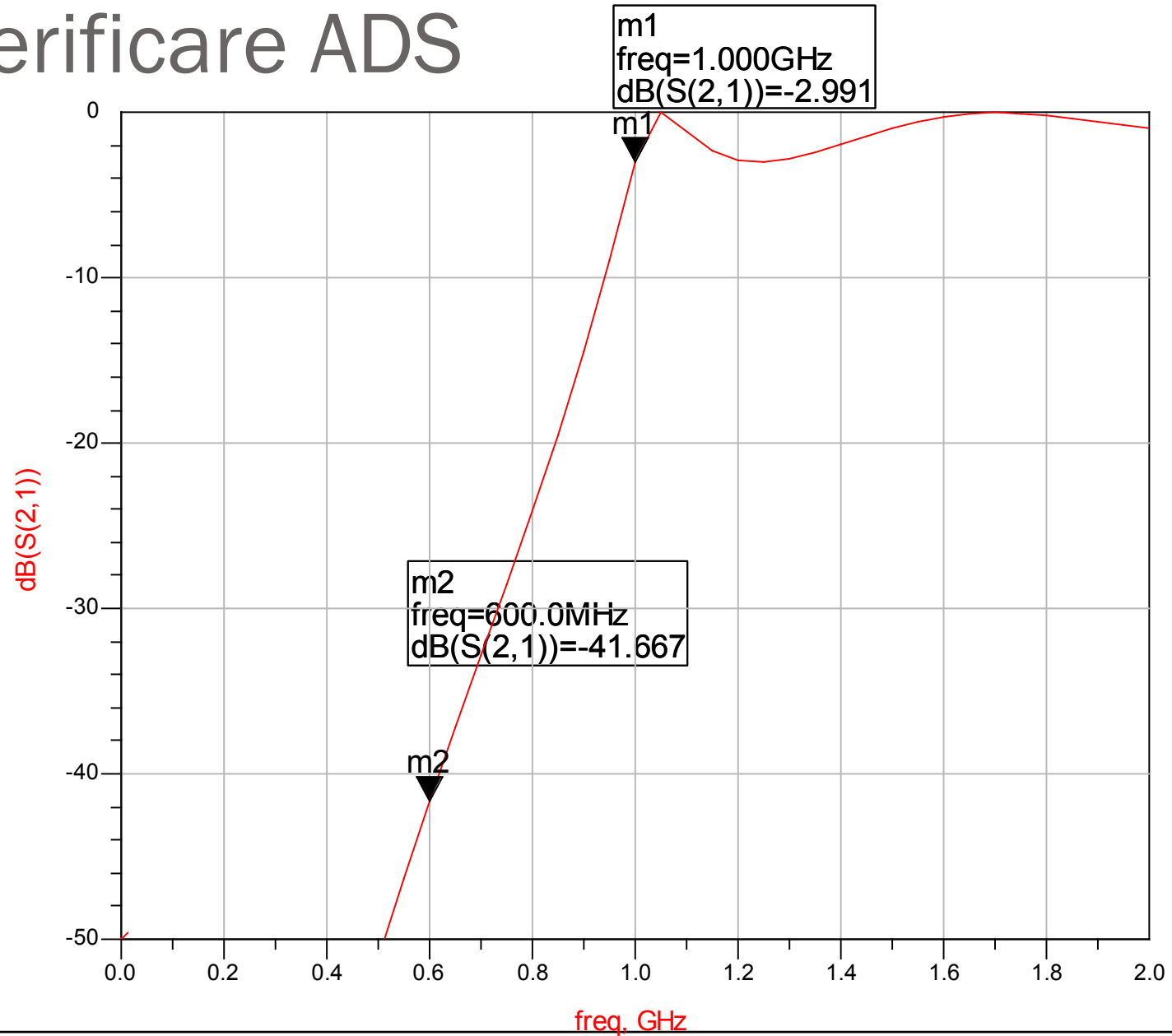
Verificare ADS



 **S-PARAMETERS**

S_Param
SP1
Start=0 GHz
Stop=2 GHz
Step=0.05 GHz

Verificare ADS



Filtre – Problema 2

- Să se proiecteze un filtru trece-jos de tip maxim plat în tehnologie microstrip. Specificațiile sunt: frecvența de tăiere 6 GHz, ordinul 3, impedanța de 50 Ω .

EXEMPLU - Curs 9

- Să se proiecteze un filtru trece-jos în tehnologie microstrip. Specificațiile sunt: frecvența de tăiere 4 GHz, ordinul 3, impedanța de 50 Ω , și o caracteristică echi-riplu de 3 dB.

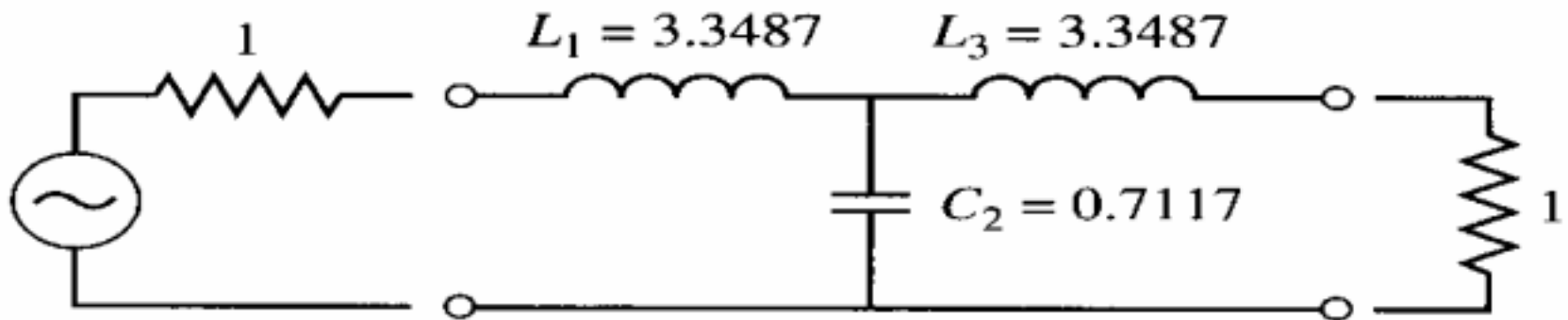
Solutie

$$g_1 = 3.3487 = L_1$$

$$g_2 = 0.7117 = C_2$$

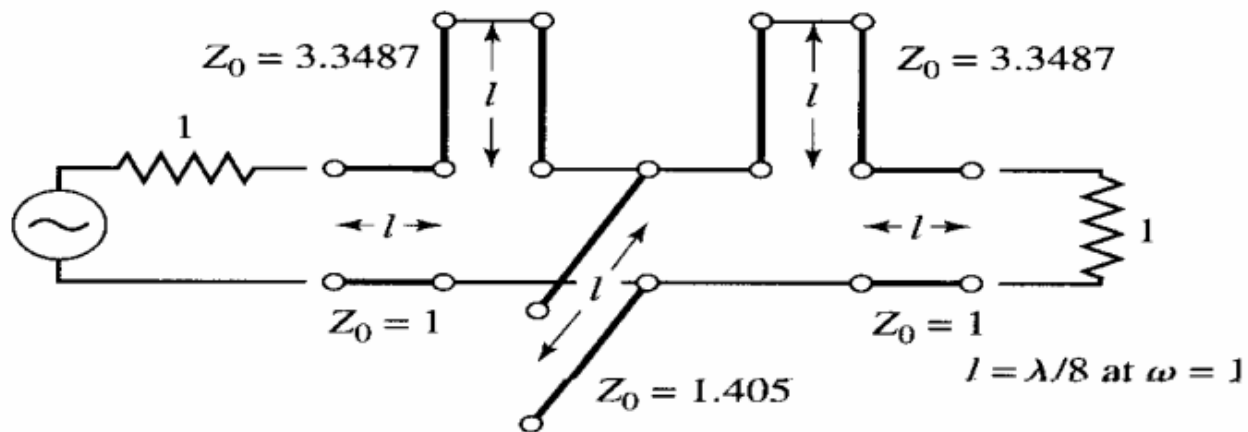
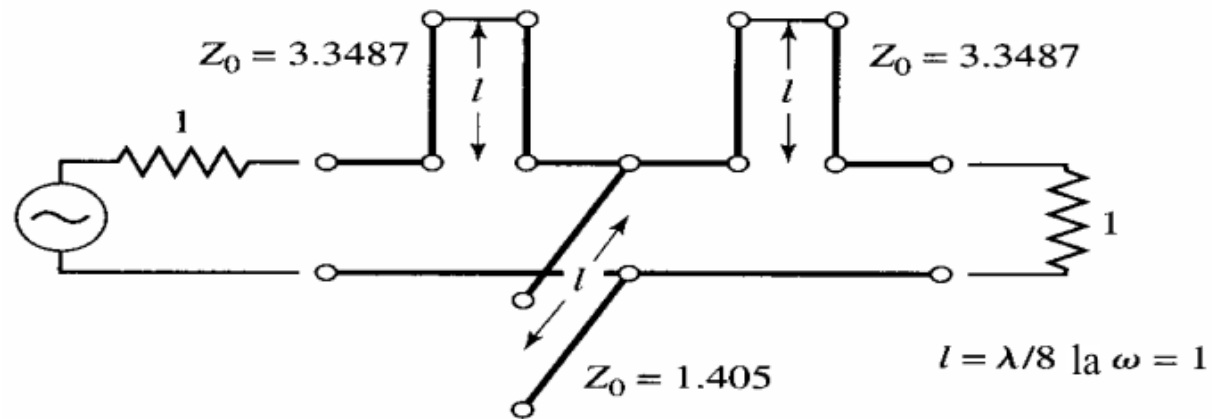
$$g_3 = 3.3487 = L_3$$

$$g_4 = 1.0000 = R_L$$



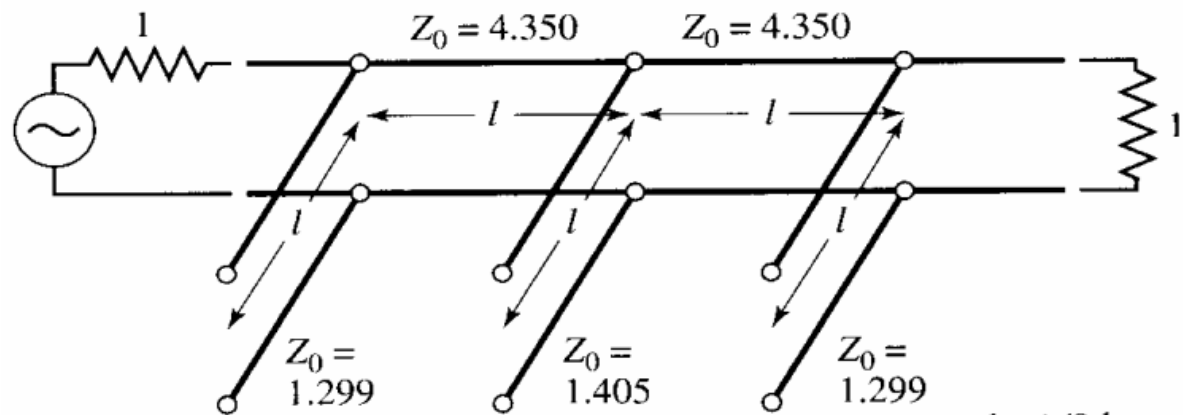
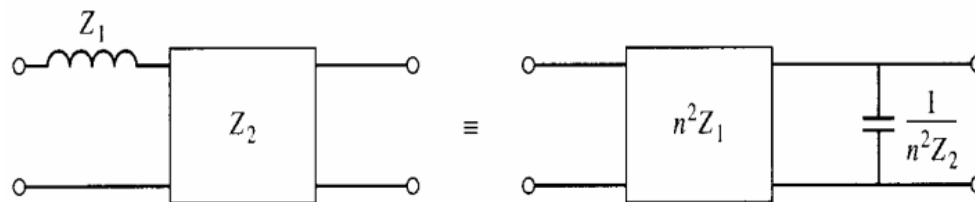
Solutie - 2

$$Z_{L1} = L_1 \quad Z_{C2} = \frac{1}{C_2} \quad Z_{L3} = L_3$$



Solutie - 3

$$n = \sqrt{1 + \frac{R_L}{Z_{L1}}} \quad n^2 = 1.299$$

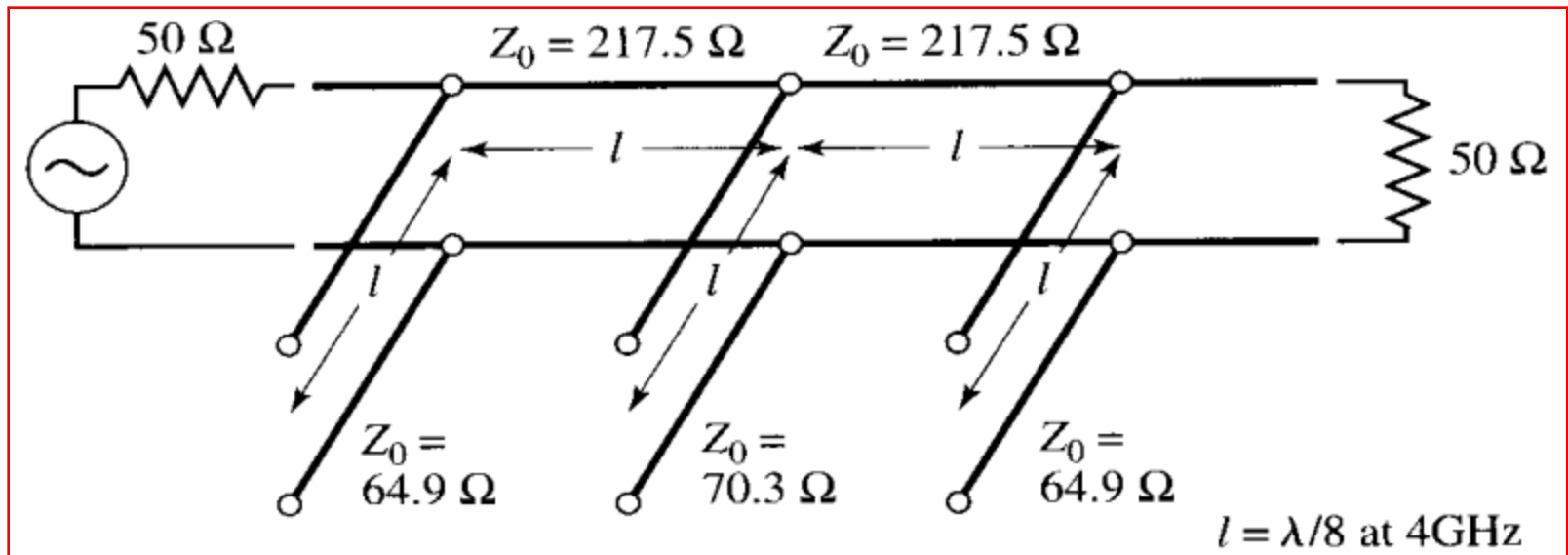


$$l = \lambda/8 \text{ la } \omega = 1$$

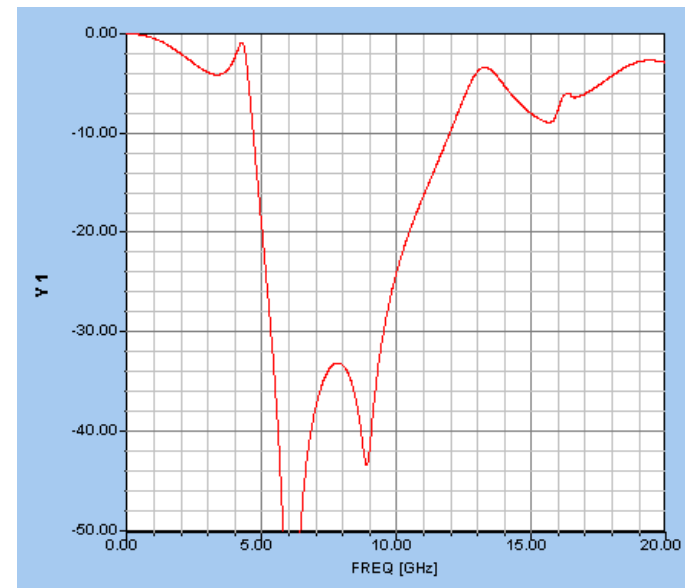
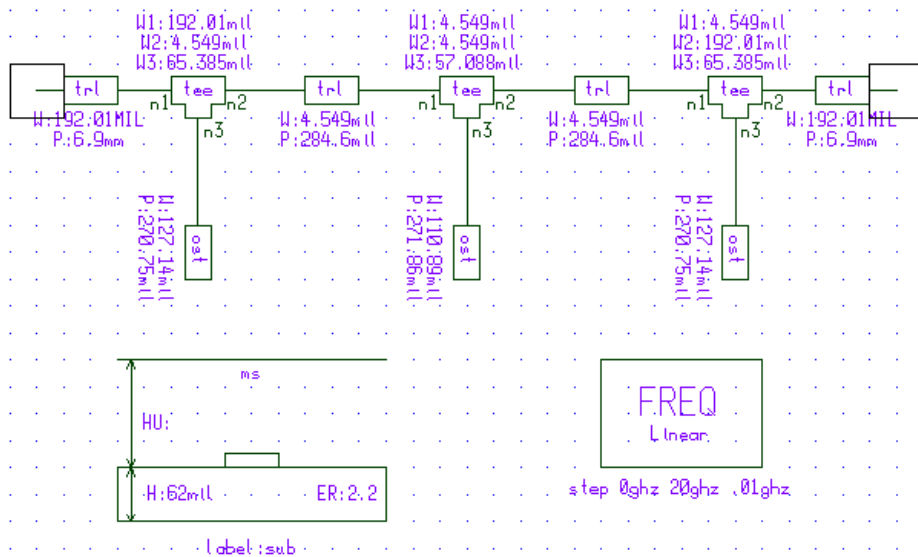
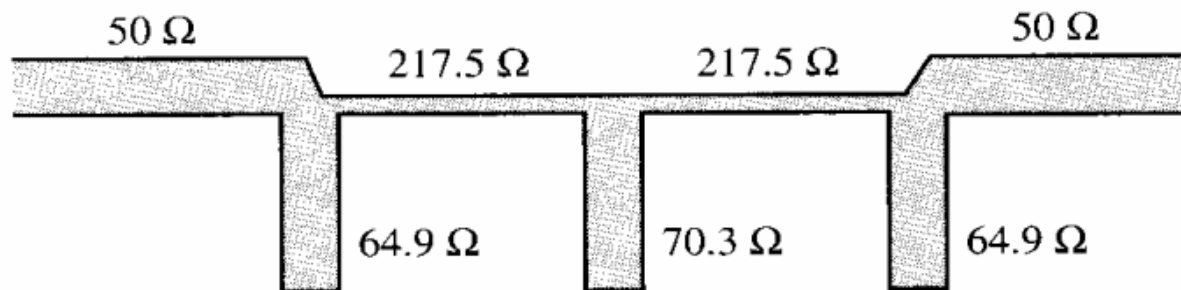
Solutie - 4

$$Z_{sh1} = n^2 Z_0 = 64.93\Omega \quad Z_{sh2} = Z_{C2} \cdot Z_0 = 70.254\Omega \quad Z_{sh3} = n^2 Z_0 = 64.93\Omega$$

$$Z_{se1} = n^2 \cdot Z_{L1} \cdot Z_0 = 217.435\Omega \quad Z_{se2} = n^2 \cdot Z_{L3} \cdot Z_0 = 217.435\Omega$$

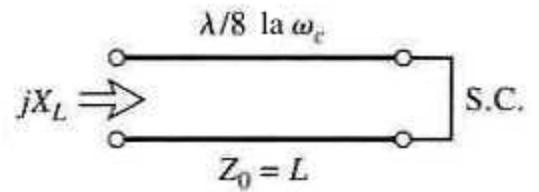
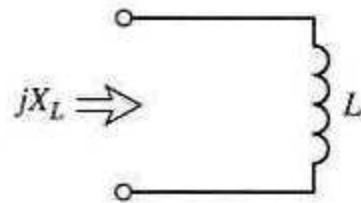
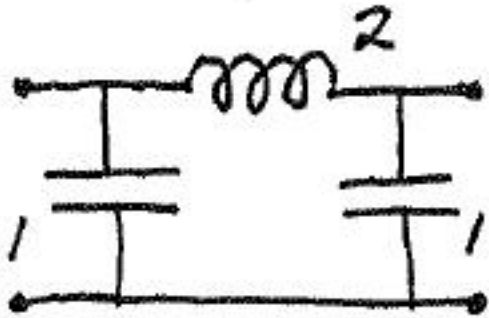


Solutie – Filtrul realizat microstrip si simulat

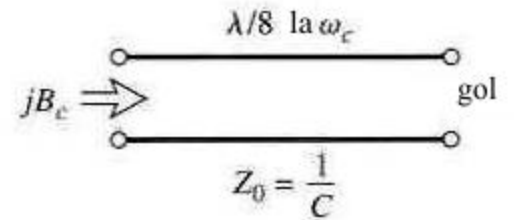
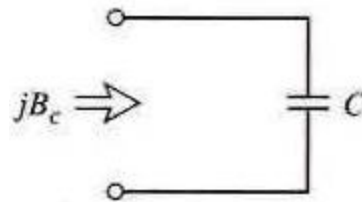
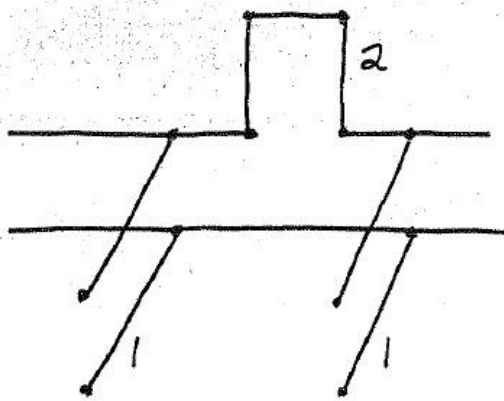


Rezolvare

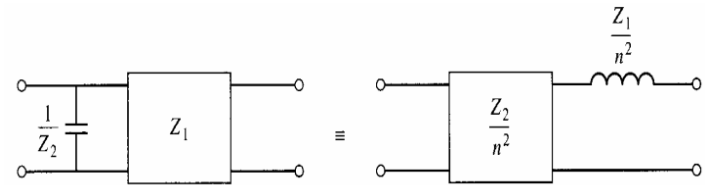
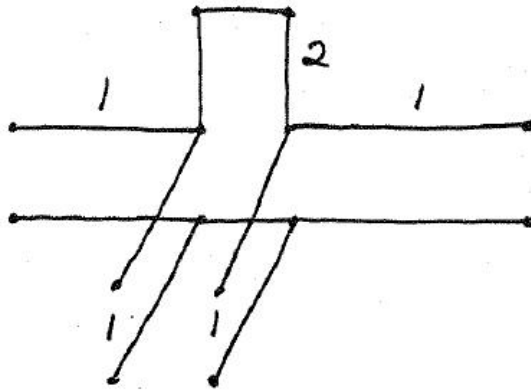
- Filtru prototip



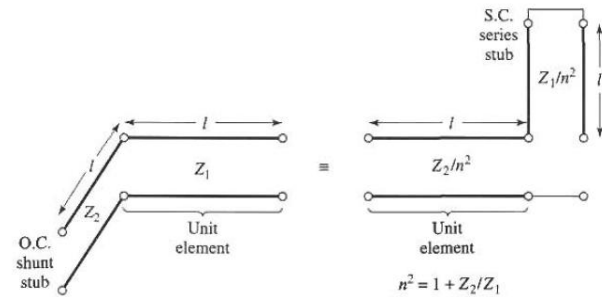
- Transformarea Richard



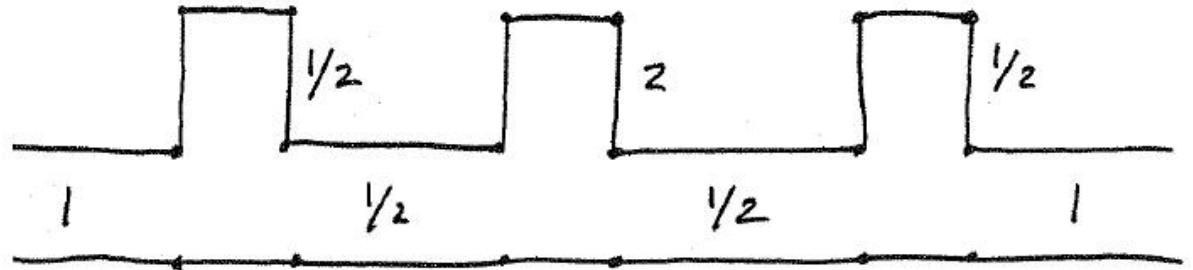
- Adaugarea elementelor unitate la capete



- Identitatile Kuroda (de 2 ori)



$$\begin{aligned} Z_1 &= 1 \\ Z_2 &= 1 \\ n^2 &= 1 + \frac{Z_2}{Z_1} \\ &= 2 \end{aligned}$$



- Scalare la 50Ω

